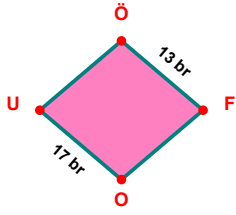
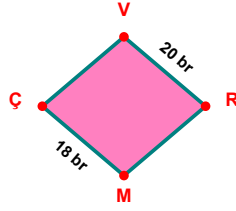


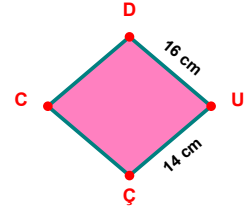
SORU: Aşağıdaki şekillerde verilen, kenar uzunlukları farklarını bulunuz.



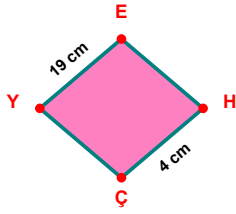
$$|OU| - |ÖF| = \dots\dots\dots$$



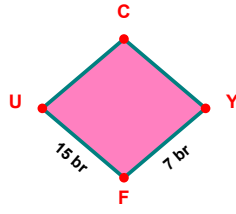
$$|VR| - |MÇ| = \dots\dots\dots$$



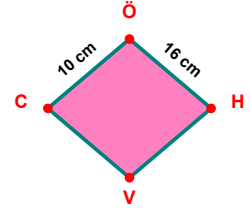
$$|DU| - |UÇ| = \dots\dots\dots$$



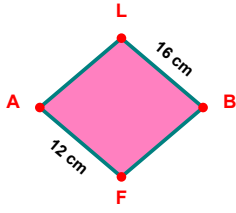
$$|YE| - |HÇ| = \dots\dots\dots$$



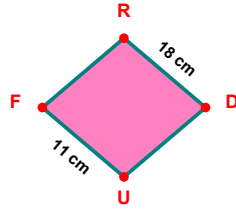
$$|FU| - |YF| = \dots\dots\dots$$



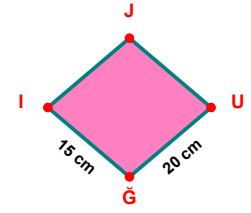
$$|ÖH| - |CÖ| = \dots\dots\dots$$



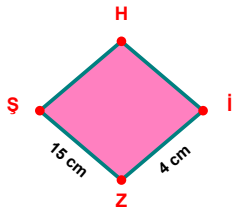
$$|LB| - |FA| = \dots\dots\dots$$



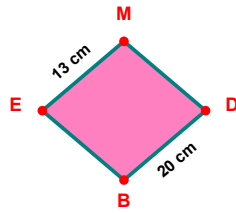
$$|RD| - |UF| = \dots\dots\dots$$



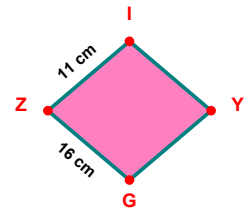
$$|UĞ| - |ĞI| = \dots\dots\dots$$



$$|ZŞ| - |İZ| = \dots\dots\dots$$

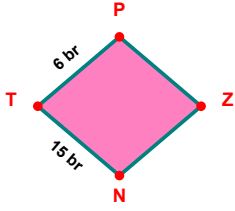


$$|DB| - |EM| = \dots\dots\dots$$

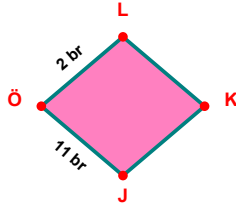


$$|GZ| - |ZI| = \dots\dots\dots$$

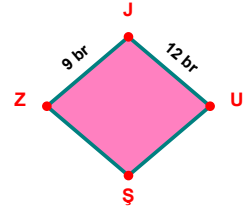
SORU: Aşağıdaki şekillerde verilen, kenar uzunlukları farklarını bulunuz.



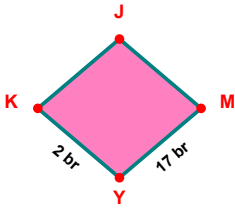
$$|NT| - |TP| = \dots\dots$$



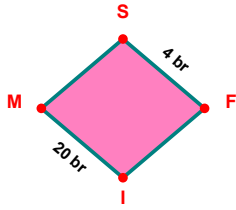
$$|JÖ| - |ÖL| = \dots\dots$$



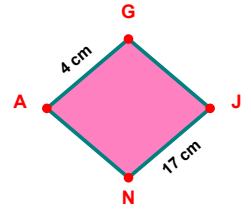
$$|JU| - |ZJ| = \dots\dots$$



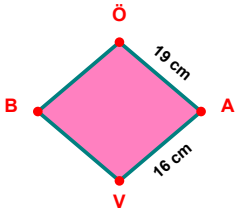
$$|MY| - |YK| = \dots\dots$$



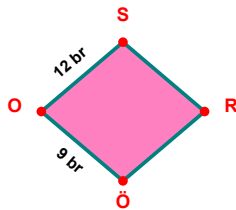
$$|IM| - |SF| = \dots\dots$$



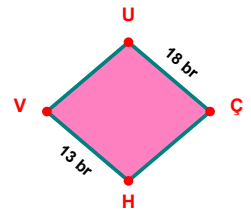
$$|JN| - |AG| = \dots\dots$$



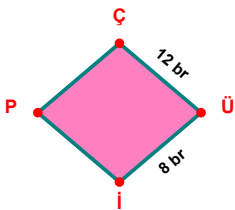
$$|ÖA| - |AV| = \dots\dots$$



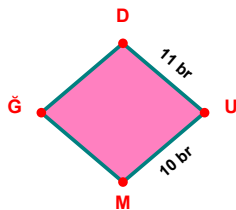
$$|OS| - |ÖO| = \dots\dots$$



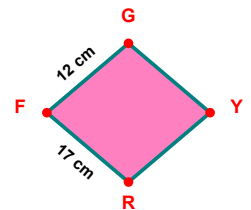
$$|UÇ| - |HV| = \dots\dots$$



$$|ÇÜ| - |Üİ| = \dots\dots$$



$$|DU| - |UM| = \dots\dots$$



$$|RF| - |FG| = \dots\dots$$

SÜREÇ ODAKLI DEĞERLENDİRME ÖLÇEĞİ

Doğru Sayısı: / 24

Öğretmen ilgili kutucuğu işaretler.

Geliştirilmeli (0-8)

İyi (9-14)

Çok İyi (15-20)

Mükemmel (21-24)

☐☐☐☐

Hazırlayan:

Bu bölüme sınıfınızın ilgili kazanıma yönelik genel durumuna ilişkin gözlem ve izlenimlerinizi, öğrencilerinizin bu kazanımla ilgili öğrenme eksikliklerini ve bu eksikliklerin giderilmesi amacıyla yaptığınız/yapmayı planladığınız faaliyetleri not edebilirsiniz.

No	Adı - Soyadı	Toplam Puan	Değerlendirme
1			
2			
3			
4			
5			
6			
7			
8			
9			
10			
11			
12			
13			
14			
15			
16			
17			
18			
19			
20			
21			
22			
23			
24			
25			
26			
27			
28			
29			
30			
31			
32			
33			
34			
35			

Hazırlayan: